

Solve the problems

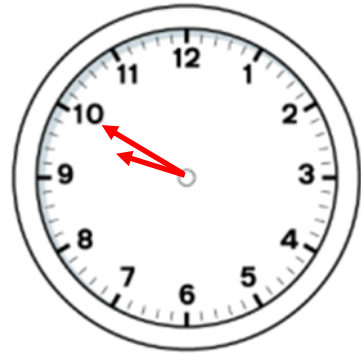
1

Draw the time quarter past two.



2

Draw the time ten to ten.



3

Draw the time 6:05pm



4

Draw the time 4:35am



5

What time does the clock show?

Ten minutes past ten.

10.10



6

What time does the clock show?

Quarter to three.

2.45



7

What time does the clock show?

Five minutes to four.

3.55



8

What time does the clock show?

Twenty past ten.

10.20



Solve these time problems


1

Draw 4 minutes to 3.



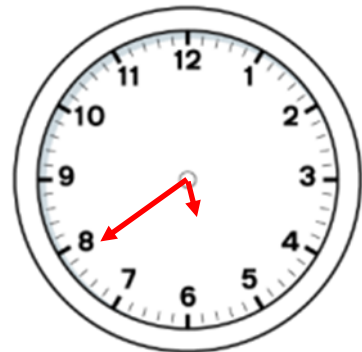
2

Drawn 7 minutes past 2.



3

Draw 39 minutes past 5.



4

Draw 28 minutes past 7.




Solve these time problems

1

What is the time?

Two minutes past two.

2.02



2

What is the time?

Eighteen minutes past three.

3.18



3

What is the time?

Twenty two minutes to six.

5.38



4

What is the time?

Seven minutes to one.

12.53



Solve these time problems

1

Label these activities with a.m or p.m

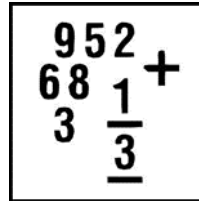
PM



AM



AM



2

Sort the four times below from earliest to latest.

9:45 p.m.

10:23 a.m.

9.45am, 10.23am, 5.30pm, 9.45pm

5:30 p.m.

9:45 a.m.

3

Sort the four times below from latest to earliest.

4.50 pm

11.15 pm

11.15pm, 9.48pm, 4.50pm, 7.32 am

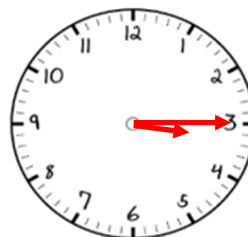
7.32 am

9.48 pm

4

Show the time on an analogue and digital clock (Use 24 hour clock)

Home time: 3:15pm

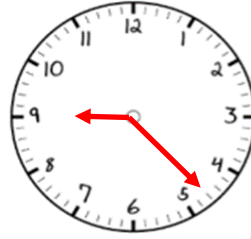


15 : 15

5

Show the time on an analogue and digital clock (Use 24 hour clock)

Home time: 9.23 am

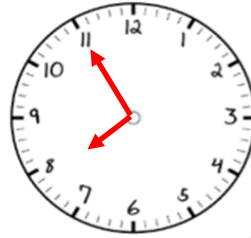


09 : 23

6

Show the time on an analogue and digital clock (Use 24 hour clock)

Home time: 7.55pm

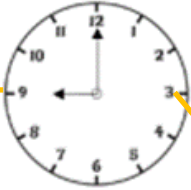
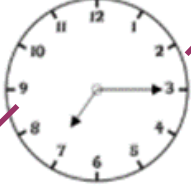
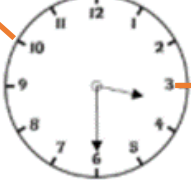


19 : 55

Solve these time problems

1

Match the times below

9 o'clock in the morning		19:15
Half past 3 in the afternoon		09:00
Quarter past 7 in the evening		15:30

Connections: 9 o'clock in the morning is connected to 09:00. Half past 3 in the afternoon is connected to 15:30. Quarter past 7 in the evening is connected to 19:15.

2

Fill in the blanks:

13:45	Quarter to two in the <u>                    </u> <b>afternoon</b>	15:45	Quarter past three in the afternoon
11:20	Twenty past eleven in the <u>                    </u> <b>morning</b>	17:35	Twenty-five to six in the evening
15:50	Ten to four in the <u>                    </u> <b>afternoon</b>	08:40	Twenty to 9 in the morning

3

Eva says the clock shows 8:20. Is she correct? Explain your answer.

8:20

Eva is correct. The minute hand is pointing at the 4 which means it is twenty past.

The hour hand is pointing just after 8.

